

















Funny Shapes

Each funny shape represents a number 1-4. The numbers around the grid represent the sum of each row. Find the value of the question mark.

				7
				14
				?
				13
11	10	11	11	

Created by David Millar on March 23, 2006.